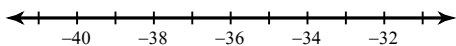


## WS 3.3 Solving Inequalities Using \* or /

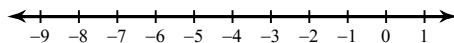
© 2013 Kuta Software LLC. All rights reserved.

**Solve each inequality and graph its solution.**

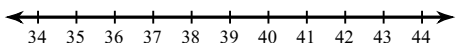
1)  $\frac{b}{5} < -7$



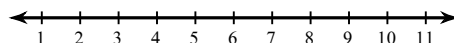
2)  $10x > -40$



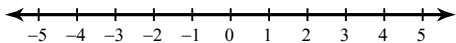
3)  $\frac{a}{4} \geq 10$



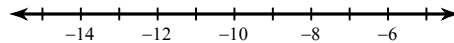
4)  $-5x \geq -30$



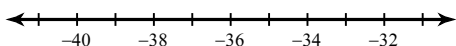
5)  $-9r > -18$



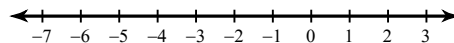
6)  $5x \leq -45$



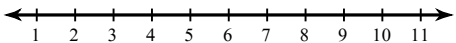
7)  $\frac{n}{9} < -4$



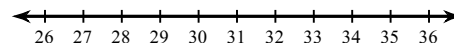
8)  $-8p < 40$



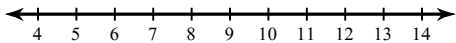
9)  $-5n < -30$



10)  $\frac{v}{10} < 3$



11)  $-10n \geq -100$



12)  $6x > 30$

